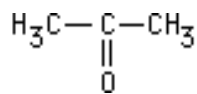


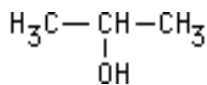
Organic Chemistry: Nomenclature Assignment

Name the following ...

1)



2)



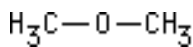
3)



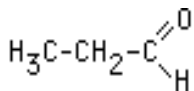
4)



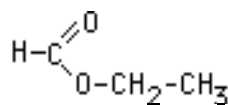
5)



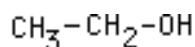
6)



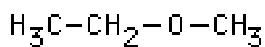
7)



8)



9)



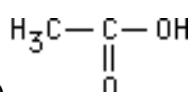
10)



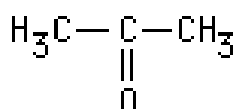
11)



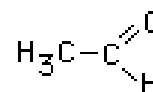
12)



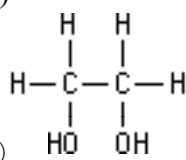
13)



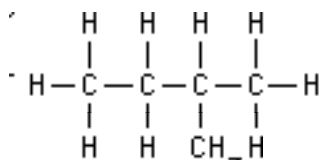
14)



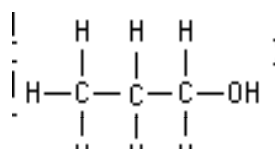
15)



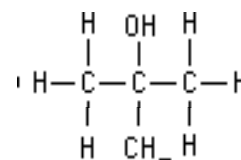
16)



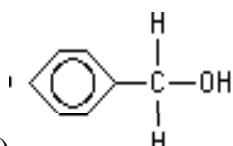
17)



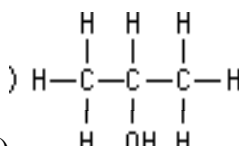
18)



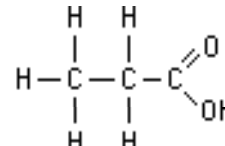
19)



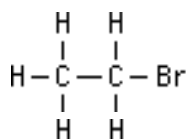
20)



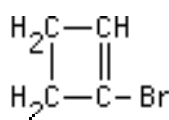
21)



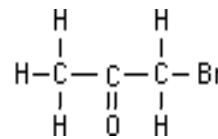
22)



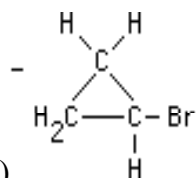
23)



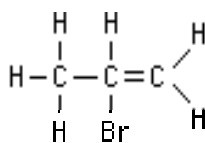
24)



25)



26)



27)

